

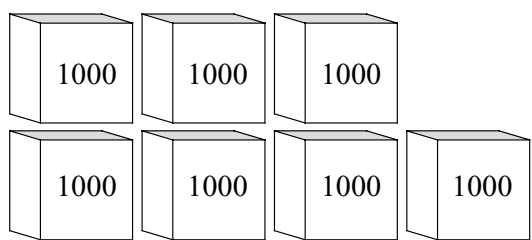
Place Value Sample Problems

34. Write the three representations for the number of cups shown in the picture below.


_____ cups
(numeral)

_____ cups
(name)

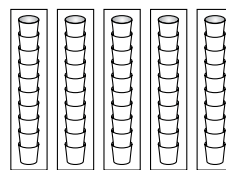
_____ cups + _____ cups + _____ cups + _____ cups
(expanded form or sum)



crates of
1000 cups



boxes of
100 cups



packs of
10 cups



individual
cups

72. a. Draw pictures to show what you think about when you look at this number:

2583 gallons

b. Read the number aloud.

c. Write 2583 gallons in expanded form:

_____ + _____ + _____ + _____ gallons